

O.P. JINDAL SCHOOL, SAVITRI NAGAR, TAMNAR
SECOND ASSESSMENT (2022 – 2023)

Class / Section : K G II A/B]

MM: 20

Subject: Maths

Time: 1 Hr 30 mins

Name: _____

Roll No.: _____

Date: _____

Invigilator,s Sign: _____

Marks Obtained: _____

Examiner,s Sign: _____

I. Write the number names of:-

($\frac{1}{2} \times 4 = 2$ Marks)

1. 35 - _____

2. 48 - _____

3. 19 - _____

4. 20 - _____

II. Subtraction :-

($1 \times 4 = 4$ Marks)

$$\begin{array}{r} 9 \\ - 5 \\ \hline \end{array}$$

$$\begin{array}{r} 6 \\ - 3 \\ \hline \end{array}$$

$$\begin{array}{r} 7 \\ - 4 \\ \hline \end{array}$$

$$\begin{array}{r} 5 \\ - 2 \\ \hline \end{array}$$

III. Addition :-

($\frac{1}{2} \times 4 = 2$ Marks)




$$\begin{array}{r} 25 \\ + 42 \\ \hline \end{array}$$

$$\begin{array}{r} 74 \\ + 20 \\ \hline \end{array}$$

$$\begin{array}{r} 46 \\ + 21 \\ \hline \end{array}$$

$$\begin{array}{r} 51 \\ + 20 \\ \hline \end{array}$$

IV. Colour the picture according to the given ordinal numbers :- (1×3 = 3 Marks)






V. Draw and Colour :-

(1×3 = 3 Marks)

Square

Cone

Circle



VI. Write the value of currency in the below given space :-

(1 × 4 = 4 Marks)





VII. Write the time shown in the clock in the below given space:-

(1×2=2 Marks)

